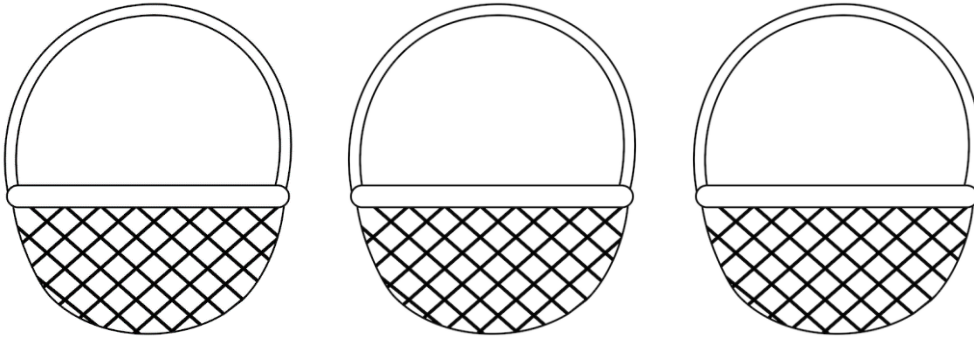


Aluno(a): \_\_\_\_\_ Professor(a): \_\_\_\_\_



# Vamos dividir?

1. Divida as 15 maçãs em 3 cestas:



$$15 \div 3 = \underline{\quad}$$

2. Resolva as divisões e pinte as operações conforme a legenda de cores.



$$6 \div 3 =$$

$$4 \div 2 =$$

$$8 \div 2 =$$

$$12 \div 4 =$$

$$10 \div 2 =$$

$$9 \div 3 =$$

$$12 \div 3 =$$

$$20 \div 4 =$$

$$15 \div 5 =$$

$$16 \div 4 =$$

$$5 \div 1 =$$

$$4 \div 1 =$$


$$18 \div 6 =$$

$$3 \div 1 =$$

$$8 \div 4 =$$

$$15 \div 3 =$$

3. **Problema:** Pedro comprou 6 rosquinhas e dividiu entre seus 3 amigos.  
Com quantas rosquinhas cada um ficou?



**Cálculo**

**Resposta:**

Cada um ficou com \_\_\_\_\_  
rosquinhas.