



# MERCADINHO DAS COMPRAS



# FOLHETO DE COMPRAS



8,00



2,00



1,50



1,45



3,50



1,00



0,50



12,00



5,00



15,00




3,00




2,00


# FOLHETO DE COMPRAS




7,00




15,50



9,85



6,00




2,35



4,45



1,00




3,00



6,00






10,00













8,00



2,00







# LISTA DE COMPRAS




# CAIXA

VALORES DOS ITENS?

TOTAL:

VALOR RECEBIDO:

TROCO:

























## IDENTIFIQUE AS NOTAS ABAIXO:



---



---



---



---



---

## IDENTIFIQUE AS MOEDAS ABAIXO:



---



---



---



---



---


CALCULE OS PREÇOS ABAIXO:



6,00



10,00




2,35



4,45

CALCULE OS PREÇOS ABAIXO:




8,00



2,00



1,00



3,00



## VAMOS RESOLVER OS PROBLEMAS:

MARIA TEM 3 REAIS E COMPRA UMA BALA DE 1 REAL. QUANTO SOBRA PARA MARIA?

JOÃO QUER COMPRAR DOIS BRINQUEDOS QUE CUSTAM 5 REAIS CADA UM. QUANTO ELE PRECISA?

ANA TEM 10 REAIS E COMPRA UM CHOCOLATE DE 4 REAIS. QUANTO ELA AINDA TEM?

## VAMOS RESOLVER OS PROBLEMAS:

PEDRO COMPROU 3 LÁPIS POR 2 REAIS CADA. QUANTO ELE GASTOU NO TOTAL?

CARLA TINHA 15 REAIS E GASTOU 7 REAIS EM UM LIVRO. QUANTO SOBRA PARA ELA?

LUCAS QUER COMPRAR UMA BORRACHA DE 2 REAIS E UMA CANETA DE 3 REAIS. QUANTO ELE PRECISA?

## VAMOS RESOLVER OS PROBLEMAS:

JULIA RECEBEU 20 REAIS E COMPROU UM CADERNO DE 8 REAIS. QUANTO AINDA TEM?

MARCOS TINHA 12 REAIS E COMPROU DUAS REVISTAS DE 4 REAIS CADA. QUANTO ELE GASTOU NO TOTAL?

CLARA ENCONTROU UMA MOEDA DE 1 REAL NO PARQUE E JÁ TINHA 2 REAIS. QUANTO ELA TEM AGORA?

## VAMOS RESOLVER OS PROBLEMAS:

SOFIA TEM 4 REAIS E COMPRA UM PIRULITO DE 2 REAIS. QUANTO SOBRA PARA ELA?

TIAGO QUER COMPRAR TRÊS CARRINHOS QUE CUSTAM 3 REAIS CADA. QUANTO ELE PRECISA?

PEDRO COMPROU UM LIVRO DE 5 REAIS E UM CADERNO DE 4 REAIS. QUANTO ELE GASTOU NO TOTAL?

MERCADII

COMP



INHO DAS

PRAS





